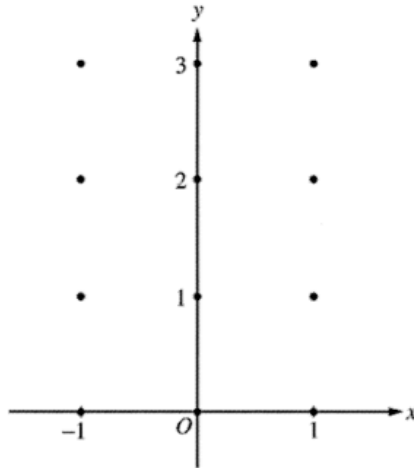


6. Consider the differential equation $\frac{dy}{dx} = x^2(y - 1)$.

- (a) On the axes provided, sketch a slope field for the given differential equation at the twelve points indicated.
(Note: Use the axes provided in the pink test booklet.)

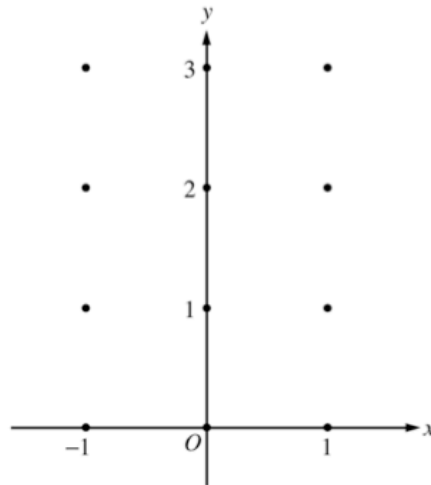


- (b) While the slope field in part (a) is drawn at only twelve points, it is defined at every point in the xy -plane. Describe all points in the xy -plane for which the slopes are positive.
- (c) Find the particular solution $y = f(x)$ to the given differential equation with the initial condition $f(0) = 3$.

Chapter 6 2004 (Form B) AB 5

5. Consider the differential equation $\frac{dy}{dx} = x^4(y - 2)$.

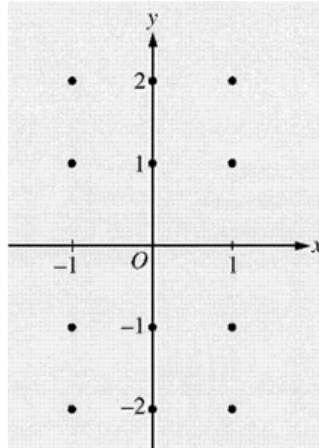
- (a) On the axes provided, sketch a slope field for the given differential equation at the twelve points indicated.
(Note: Use the axes provided in the test booklet.)



- (b) While the slope field in part (a) is drawn at only twelve points, it is defined at every point in the xy -plane. Describe all points in the xy -plane for which the slopes are negative.
- (c) Find the particular solution $y = f(x)$ to the given differential equation with the initial condition $f(0) = 0$.

6. Consider the differential equation $\frac{dy}{dx} = -\frac{2x}{y}$.

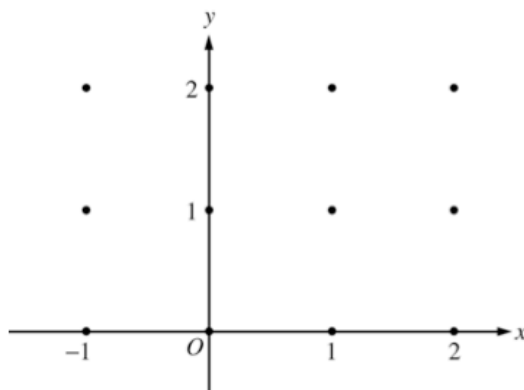
- (a) On the axes provided, sketch a slope field for the given differential equation at the twelve points indicated.
(Note: Use the axes provided in the pink test booklet.)



- (b) Let $y = f(x)$ be the particular solution to the differential equation with the initial condition $f(1) = -1$. Write an equation for the line tangent to the graph of f at $(1, -1)$ and use it to approximate $f(1.1)$.
- (c) Find the particular solution $y = f(x)$ to the given differential equation with the initial condition $f(1) = -1$.

6. Consider the differential equation $\frac{dy}{dx} = \frac{-xy^2}{2}$. Let $y = f(x)$ be the particular solution to this differential equation with the initial condition $f(-1) = 2$.

(a) On the axes provided, sketch a slope field for the given differential equation at the twelve points indicated. (Note: Use the axes provided in the test booklet.)



(b) Write an equation for the line tangent to the graph of f at $x = -1$.

(c) Find the solution $y = f(x)$ to the given differential equation with the initial condition $f(-1) = 2$.

